

My Rekenreks

By _____

<hr/> <hr/>

<hr/> <hr/>

<hr/> <hr/>

<hr/> <hr/>

My Rekenreks

By _____

 $\square + \square = \square$

 $\square + \square = \square$

 $\square + \square = \square$

 $\square + \square = \square$

 $\square + \square = \square$

 $\square + \square = \square$

 $\square + \square = \square$

 $\square + \square = \square$

Partner A

 $\square + \square = \square$

Partner B

 $\square + \square = \square$

Partner A

 $\square + \square = \square$

Partner B

 $\square + \square = \square$

Partner A

 $\square + \square = \square$

Partner B

 $\square + \square = \square$

Partner A

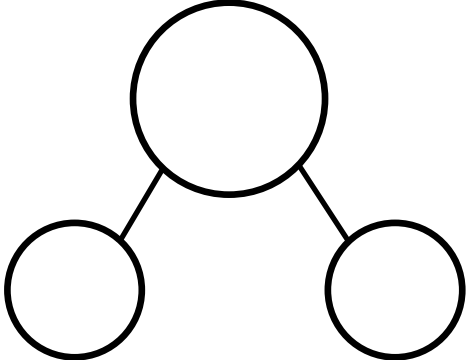
 $\square + \square = \square$

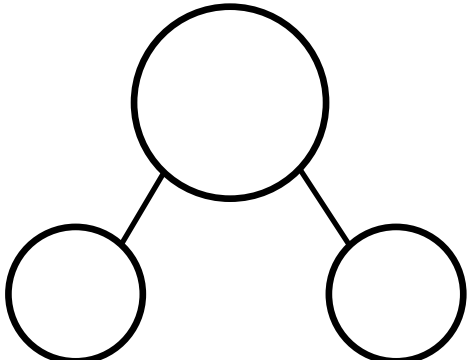
Partner B

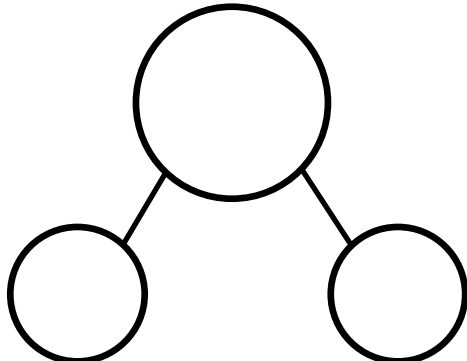
 $\square + \square = \square$

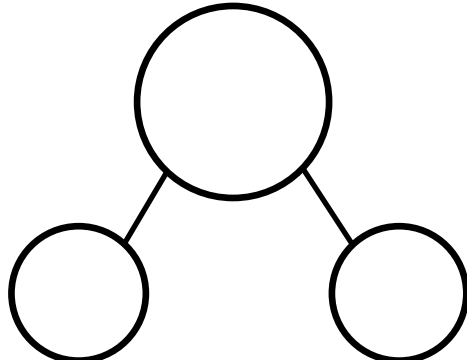
My Rekenreks

By _____

<hr/> <hr/>	
-------------	--

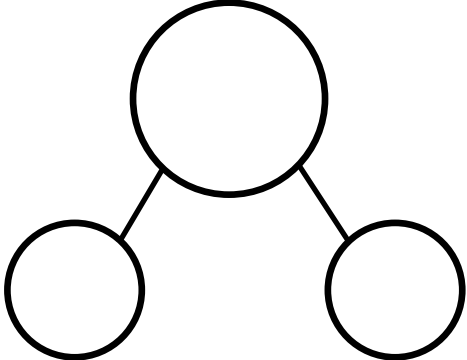
<hr/> <hr/>	
-------------	---

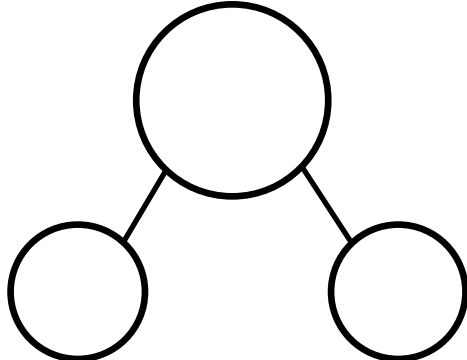
<hr/> <hr/>	
-------------	--

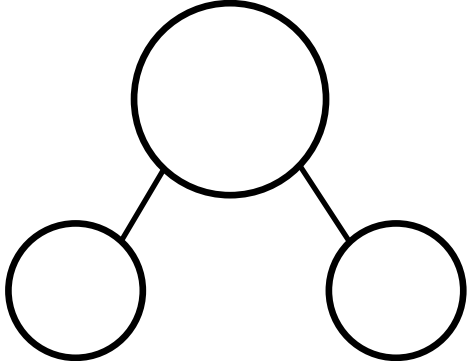
<hr/> <hr/>	
-------------	--

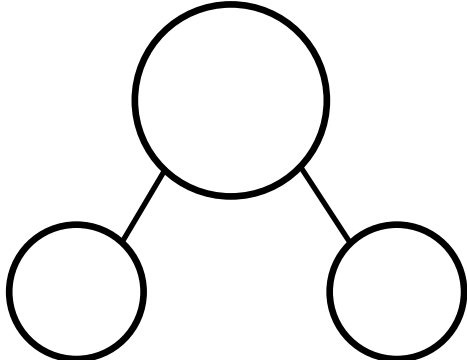
My Rekenreks

By _____

<hr/> <hr/> <input type="text"/> + <input type="text"/> = <input type="text"/>	
---	--

<hr/> <hr/> <input type="text"/> + <input type="text"/> = <input type="text"/>	
---	---

<hr/> <hr/> <input type="text"/> + <input type="text"/> = <input type="text"/>	
---	--

<hr/> <hr/> <input type="text"/> + <input type="text"/> = <input type="text"/>	
---	--

My Rekenreks: Sums to 4 and 5

By _____

 $4 = \square + \square$

 $4 = \square + \square$

 $4 = \square + \square$

 $5 = \square + \square$

 $5 = \square + \square$

 $5 = \square + \square$

 $5 = \square + \square$

 $5 = \square + \square$

My Rekenreks: Sums to 6 and 7

By _____

$$6 = \square + \square$$

$$6 = \square + \square$$

$$6 = \square + \square$$

$$6 = \square + \square$$

$$7 = \square + \square$$

$$7 = \square + \square$$

$$7 = \square + \square$$

$$7 = \square + \square$$

My Rekenreks: Sums to 8 and 9

By _____

 $8 = \square + \square$

 $8 = \square + \square$

 $8 = \square + \square$

 $8 = \square + \square$

 $9 = \square + \square$

 $9 = \square + \square$

 $9 = \square + \square$

 $9 = \square + \square$

My Rekenreks: Sums to 10

By _____

 $10 = \square + \square$

 $10 = \square + \square$

 $10 = \square + \square$

 $10 = \square + \square$

 $10 = \square + \square$

 $10 = \square + \square$

 $10 = \square + \square$

 $10 = \square + \square$